


Lecture 1

Tuesday, January 12, 2021 2:19 PM

* Prayer

* Spiritual thought : the Spirit makes us happy. When we are happy, we learn better (Math and any other subject)

* Math 314 is an extension of Math 112 (Calculus I).



graph of a function of
one variable



graph of a function
of two variables

2D humps & troughs : when derivatives = 0

3D hills & valleys : when derivatives = 0

we have to
make sense what this means

Graph of a function of two variables is a surface.

Syllabus — grading: HW, online HW, Midterm, Final
lowest 4 optional not comprehensive
online

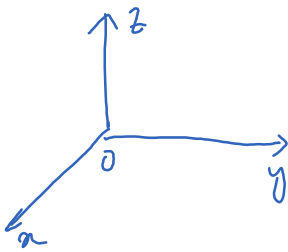
Learning Suite

Web Assign: solution to odd problems.

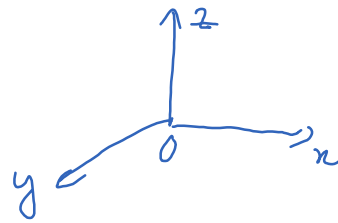
Ex:

$$f(x, y) = 1$$
$$f(x, y) = x$$
$$f(x, y) = x^2 + y^2$$

Orientation:



Positive orientation



Negative orientation

Right-hand rule } example of the classroom corner
"Head-toe" rule }

Introduce Mathematica (if time allows)

Points
position

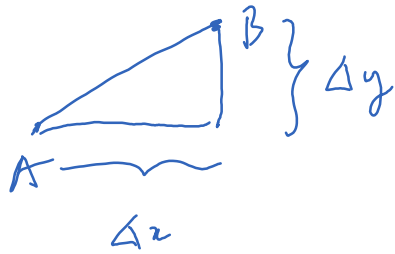
vs

vectors
displacement/
movement

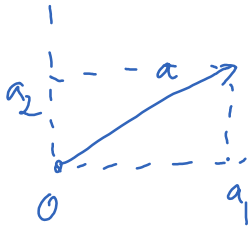
$A(1, 2, 3)$

$a = \langle 1, 2, 3 \rangle$

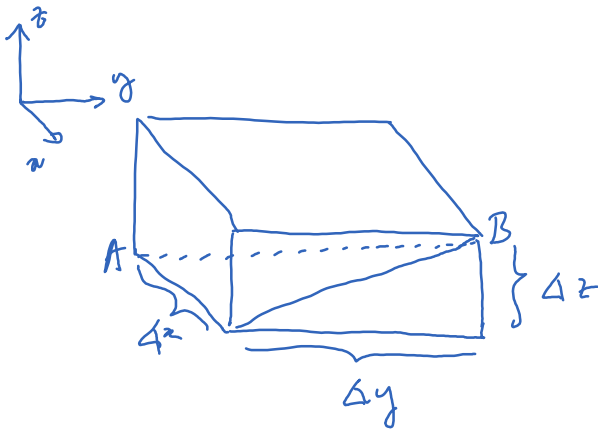
One can compute the distance between two points by Pythagorean theorem.



$$AB = \sqrt{(\Delta x)^2 + (\Delta y)^2}$$



$$|a| = \sqrt{a_1^2 + a_2^2}$$



$$AB = \sqrt{(\Delta x)^2 + (\Delta y)^2 + (\Delta z)^2}$$

Ex:

$$A(1, 0, -1)$$

$$B(3, 2, 0)$$

$$C(3, -4, 3)$$

Is the triangle ABC a right triangle, obtuse or acute triangle?


$$AB = \sqrt{2^2 + 2^2 + 1^2} = 3$$

$$BC = \sqrt{0^2 + 6^2 + 3^2} = \sqrt{45} = 3\sqrt{5}$$

$$AC = \sqrt{2^2 + 4^2 + 4^2} = 6$$

} right triangle

Ex: distance between two spheres

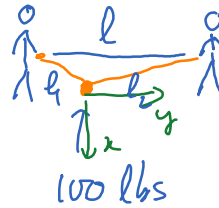


Centered at $(1, 1, 1)$
radius 1

centered at $(-1, 0, 2)$
radius 2

Vectors

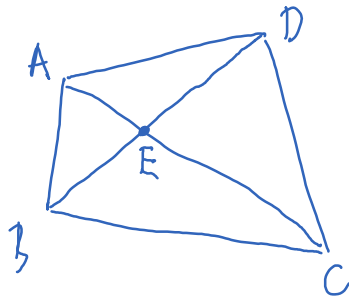
- addition
- subtraction
- scaling
- dot product
- angle
- cross product



$l = 8 \text{ ft}$
 $l_1 = 3 \text{ ft}$
 $l_2 = 6 \text{ ft}$

$$\vec{i}_1 + \vec{i}_2 + \vec{P} = \vec{0}$$

Ex



$A(1, 2, 3)$

$B(2, 4, 2)$

$C(0, 1, 1)$

$D(2, 5, -1)$

$$\left. \begin{array}{l} \vec{BA} = (1, 2, -1) \\ \vec{BC} = (-2, -3, -1) \end{array} \right\}$$

Find coord of E.